







Name: \_\_\_\_\_

The number of objects is the same as the top number.

Draw an X through the amount to take away. Count the number left to find the remainder. Write that number.

 $\begin{array}{r} 4 \\ - 1 \\ \hline 3 \end{array}$	 $\begin{array}{r} 4 \\ - 4 \\ \hline \end{array}$
 $\begin{array}{r} 4 \\ - 3 \\ \hline \end{array}$	 $\begin{array}{r} 4 \\ - 0 \\ \hline \end{array}$
 $\begin{array}{r} 4 \\ - 1 \\ \hline \end{array}$	 $\begin{array}{r} 4 \\ - 2 \\ \hline \end{array}$